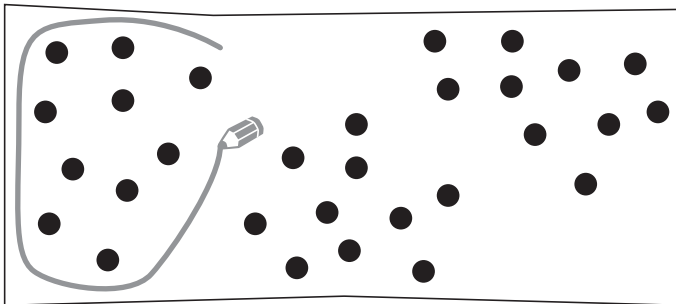
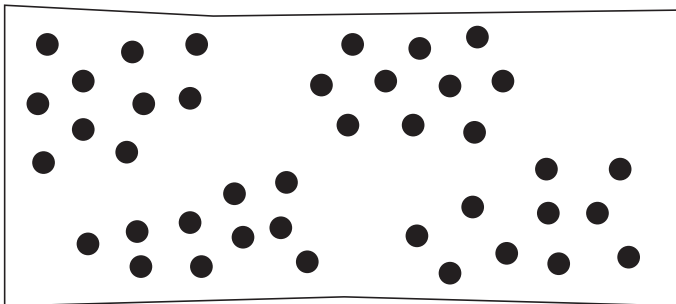



1 Kreise immer 10 ein. Bilde die Malaufgabe.



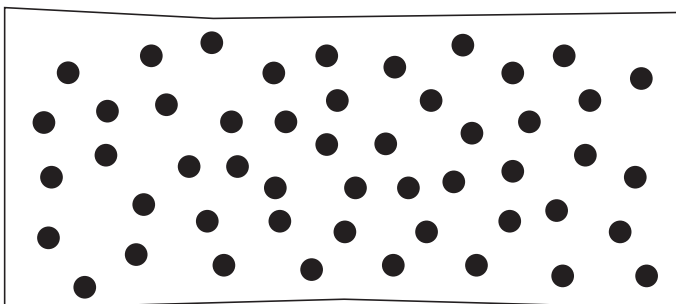
$$3 \cdot 10 = \underline{30}$$



$$\underline{\quad} \cdot 10 = \underline{\quad}$$



$$\underline{\quad} \cdot \underline{\quad} = \underline{\quad}$$



$$\underline{\quad} \cdot \underline{\quad} = \underline{\quad}$$

2 $1 \cdot 10 = \underline{10}$

$6 \cdot 10 = \underline{\quad}$

3 $4 \cdot 10 = \underline{\quad}$

$5 \cdot 10 = \underline{\quad}$

$2 \cdot 10 = \underline{\quad}$

$7 \cdot 10 = \underline{\quad}$

$9 \cdot 10 = \underline{\quad}$

$6 \cdot 10 = \underline{\quad}$

$3 \cdot 10 = \underline{\quad}$

$8 \cdot 10 = \underline{\quad}$

$2 \cdot 10 = \underline{\quad}$

$3 \cdot 10 = \underline{\quad}$

$4 \cdot 10 = \underline{\quad}$

$9 \cdot 10 = \underline{\quad}$

$8 \cdot 10 = \underline{\quad}$

$7 \cdot 10 = \underline{\quad}$

$5 \cdot 10 = \underline{\quad}$

$10 \cdot 10 = \underline{\quad}$

$1 \cdot 10 = \underline{\quad}$

$10 \cdot 10 = \underline{\quad}$